


**Kumon Math Challenge – Sample Questions
Grade 1**

1.



- A. 20
- B. 1
- C. 21
- D. 16

3. $200 - 6 =$

- A. 244
- B. 194
- C. 196
- D. 190

4.
$$\begin{array}{r} 16 \\ + 8 \\ \hline \end{array}$$

- A. 23
- B. 8
- C. 34
- D. 24

2. Which has the most?



5.
$$\begin{array}{r} 165 \\ - 79 \\ \hline \end{array}$$

- A. 76
- B. 73
- C. 89
- D. 86

6.
$$\begin{array}{r} 100 \\ - \square \\ \hline 76 \end{array}$$

- A. 156
- B. 44
- C. 34
- D. 24

Kumon Math Challenge – Sample Questions
Grade 1

7.
$$\begin{array}{r} 23 \\ \times 3 \\ \hline \end{array}$$

- A. 69
- B. 66
- C. 96
- D. 72

8. $15 \div 5 =$

- A. 2
- B. 3
- C. 5
- D. 1

9. Zack likes plants. Yesterday he collected six plants. Today he collected five more than yesterday. How many plants does Zack have altogether?

- A. 11 plants
- B. 17 plants
- C. 1 plant
- D. 19 plants

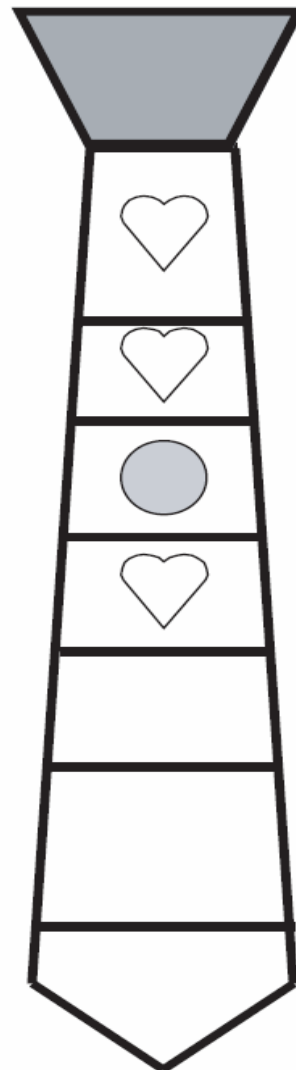
10. There are 27 pencils. 15 pencils are given away. How many pencils are left?

- A. 12 pencils
- B. 42 pencils
- C. 27 pencils
- D. 15 pencils

11. I am between 44 and 46. What number am I?

- A. 44
- B. 46
- C. 45
- D. 48

12. Finish the pattern. Draw the shapes you need and shade them in to match the pattern.



**Kumon Math Challenge – Sample Questions
Grade 1**

ANSWER KEY!

1. C

2. D

3. B

4. D

5. D

6. D

7. A


8. B

9. B

10.A

11.C

12.



13. C

14. 999, 1000, 1001, 1002

15. Fricke