

## Number Writing Exercises up to 10 Part 6


|                             |           |             |           |            |
|-----------------------------|-----------|-------------|-----------|------------|
| <b>100%</b><br>(mistakes) 0 | ~90%<br>1 | ~80%<br>2~3 | ~70%<br>4 | 69%~<br>5~ |
|-----------------------------|-----------|-------------|-----------|------------|


Name \_\_\_\_\_


Date        /        /


Time        :        to        :


How many dots are there? Write the numbers.







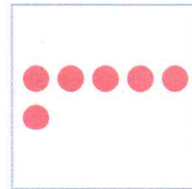








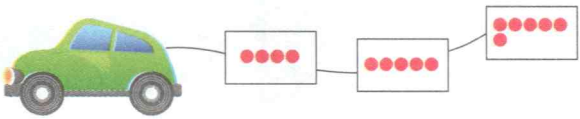
















# 4 A 93b

How many dots are there? Write the numbers.



## Number Writing Exercises up to 10 Part 6


|              |      |      |      |      |
|--------------|------|------|------|------|
| <b>100%</b>  | ~90% | ~80% | ~70% | 69%~ |
| (mistakes) 0 | 1    | 2~3  | 4    | 5~   |


Name \_\_\_\_\_


Date        /        /


Time        :        to        :


How many dots are there? Write the numbers.




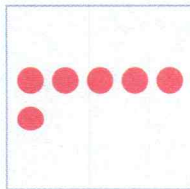

















# 4A100b

How many dots are there? Write the numbers.

